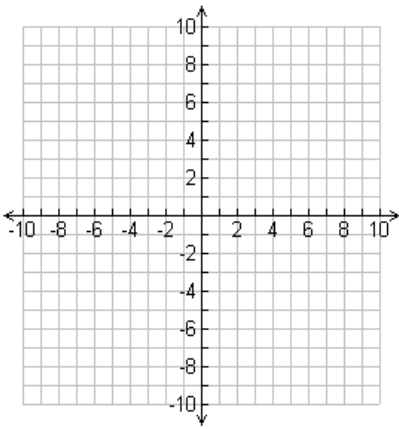
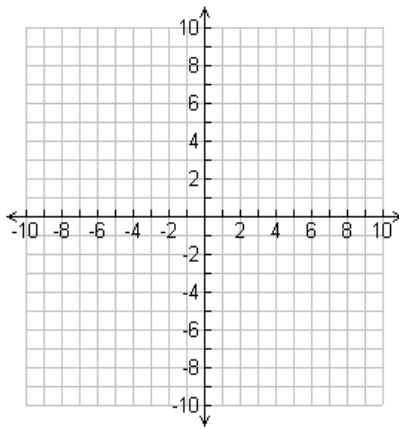


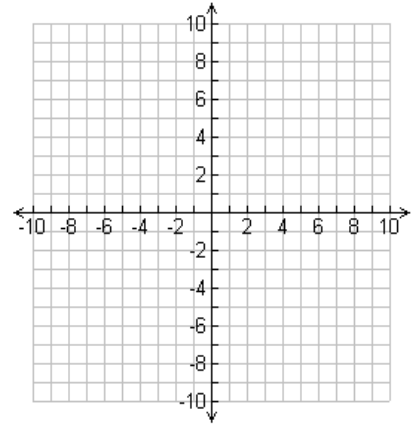
PARENT FUNCTION QUIZ 1: Sketch a graph and give the name for the parent equation listed



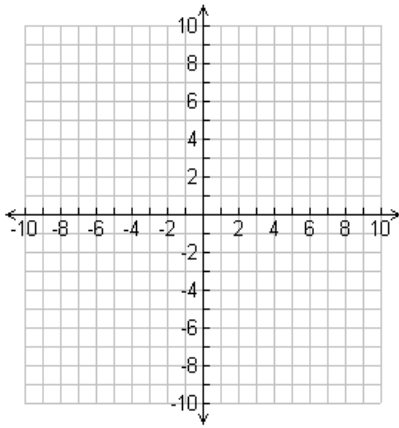
\_\_\_\_\_ Function  
 $f(x) = x^2$



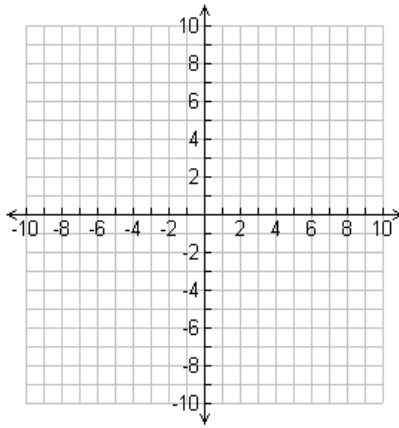
\_\_\_\_\_ Function  
 $f(x) = \frac{1}{x}$



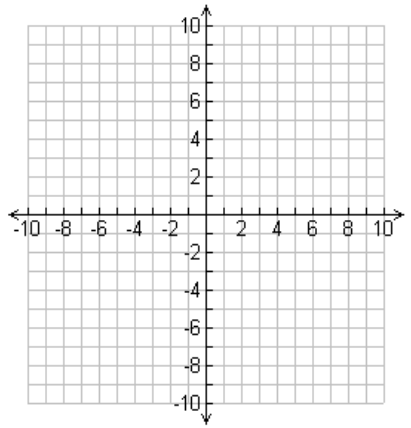
\_\_\_\_\_ Function  
 $f(x) = x$



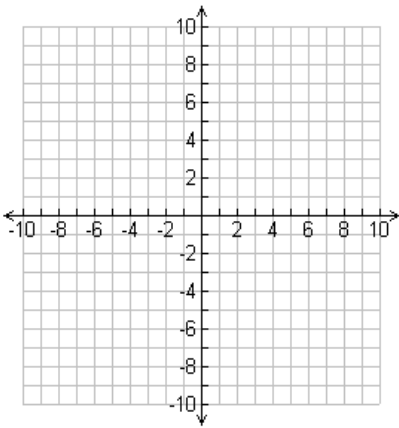
\_\_\_\_\_ Function  
 $f(x) = \llbracket x \rrbracket$



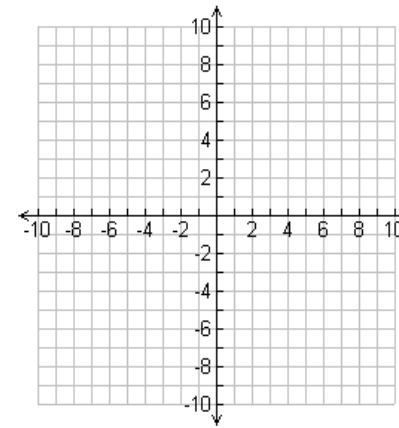
\_\_\_\_\_ Function  
 $f(x) = x^3$



\_\_\_\_\_ Function  
 $f(x) = 3^x$



\_\_\_\_\_ Function  
 $f(x) = \sqrt{x}$



\_\_\_\_\_ Function  
 $f(x) = |x|$