

Practice 28

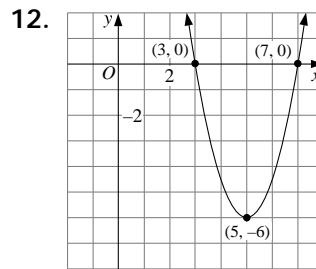
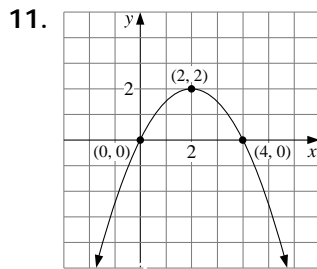
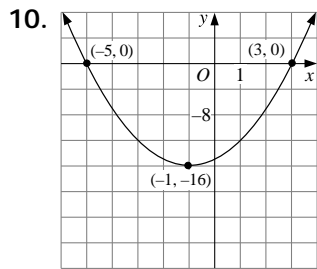
FOR USE WITH SECTION 5.3

For each equation in Exercises 1–9.

- a. Find the x -intercept(s).
- b. Find the vertex.
- c. Sketch the graph.

- | | | |
|---------------------------|------------------------------------|-------------------------------------|
| 1. $y = (x - 5)(x + 1)$ | 2. $y = -(x + 2)(x + 4)$ | 3. $y = 2(x - 3)(x + 3)$ |
| 4. $y = -3(x + 2)(x + 2)$ | 5. $y = \frac{1}{2}(x + 4)(x - 2)$ | 6. $y = -\frac{1}{3}(x - 1)(x - 5)$ |
| 7. $y = (4x - 8)(x + 2)$ | 8. $y = (x + 5)(2x - 2)$ | 9. $y = (0.4x - 2)(x + 1)$ |

Write an equation for each graph.

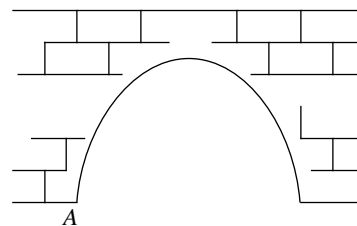


13. A water taxi charges \$6.00 per person for a short trip and has 56 regular customers. A market survey has revealed that for every \$.50 rise in the fare, the taxi will lose 4 customers.

- a. Write a quadratic function that gives the amount A taken in each day by the taxi as a function of x , the number of \$.50 price increases.
- b. What fare maximizes the amount taken in?
- c. What is the amount taken in when this fare is in effect?

14. A stone bridge over water has an arch in the shape of a parabola. The arch is 20 ft wide at its lowest point, and the highest point of the arch is 12.5 ft above water.

- a. Suppose you set up a coordinate plane with the origin at the lower left-hand corner of the arch (point A). What is the other x -intercept of the arch? What are the coordinates of the vertex of the arch?



- b. Write an equation for the arch.