



# How Does It Stack?

## Student Activity

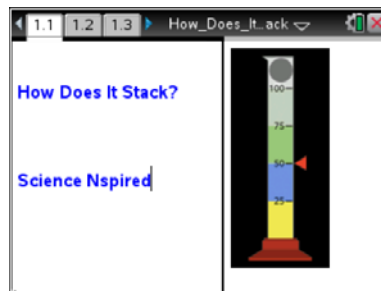


Name \_\_\_\_\_

Class \_\_\_\_\_

Open the TI-Nspire™ document *How\_Does\_It\_Stack.tns*.

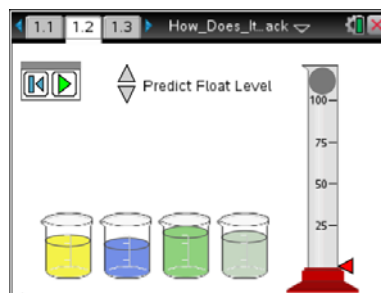
Have you ever wondered why ice floats in water? Do you know why a mixture of oil and vinegar eventually separates? Have you wondered why a rock sinks in water, while polystyrene foam floats? In this activity, you'll use a simulation to explore these questions.



The TI-Nspire document contains a virtual density column. Your task is to calculate the density of each of the four solutions. Then, based on the results, predict the order in which the layers will settle. Finally, you will predict where a solid object will float when dropped into the column.


Move to pages 1.2–1.3.

- Each beaker has a different mass and volume of a solution. You may need to reveal the information, depending on the technology you are using. **IMPORTANT: If you click or tap on the beaker, the liquid will be “poured” into the cylinder, forcing you to reset and start over.**



**Tech Tip:** To reveal the mass and volume, hover over the beakers. Be careful not to “select” them, as the liquid will be poured into the cylinder. If this happens, you will need to reset, and start over.



**Tech Tip:** Selecting the  button will reset the simulation and ALL the masses and volumes of ALL the liquids in the beakers change. You will need to start over.

Container 1	Container 2	Container 3	Container 4
Mass: _____	Mass: _____	Mass: _____	Mass: _____
Volume: _____	Volume: _____	Volume: _____	Volume: _____



# How Does It Stack?

## Student Activity




Name \_\_\_\_\_

Class \_\_\_\_\_

2. Use the calculator page 1.3 or Scratchpad to calculate the density of each solution.


What is the formula for calculating density? \_\_\_\_\_



**Tech Tip:** Press  to use Scratchpad instead of moving between pages 1.2 and 1.3 to perform calculations.

Container 1	Container 2	Container 3	Container 4
Density: _____	Density: _____	Density: _____	Density: _____
Order _____	Order _____	Order _____	Order _____

3. Once you have determined the densities, return to page 1.2 and click on the beaker containing the solution that will settle to the very bottom of the cylinder. Then, continue to “pour” the liquid from each beaker into the cylinder in the order in which they will settle. If you are correct, indicate the order of how the liquids settled- 1 being at the top, 4 being at the bottom.

*\*\*If you select an incorrect order, you will receive a Goat. Reset  the page and try again. Use the multiple trials space at end to record new data. Go back to step #1.*


4. Hover the cursor (or it may already be evident) over the solid ball to reveal mass and volume.


Mass: \_\_\_\_\_ Volume: \_\_\_\_\_

5. Use the calculator page 1.3 to calculate the density of the solid ball.

Density of Solid Ball: \_\_\_\_\_

6. Use the arrows beside “Predict Level” to move the red arrow next to the graduated cylinder to show where you predict the ball will float in the cylinder. **Be careful with this prediction—if you are wrong, you will have to start over!**

7. Click the play button  to watch the ball fall through the density column. If you correctly predicted the location of the ball, you will receive a Gold Star.

*\*\*If you did not predict the correct location of the ball, you will receive a Goat. Press the Reset button  and try again until you receive the Gold Star. You will need to start all over again, and use the space at end for multiple trials. Go back to step #1.*

**Move to pages 2.1–2.5. Answer the following questions below or on your handheld.**

- Q1. When poured into the graduated cylinder, the most dense liquid will \_\_\_\_\_.

- |                        |                        |
|------------------------|------------------------|
| A. float on top        | C. be the bottom layer |
| B. be the middle layer | D. chemically react    |



# How Does It Stack?

## Student Activity



Name \_\_\_\_\_

Class \_\_\_\_\_

- Q2. As the solid becomes more dense, it is most likely to \_\_\_\_\_.  
 A. sink  
 B. float  
 C. rise to the top  
 D. be suspended midway in the liquids
- Q3. Density is \_\_\_\_\_.  
 A. how heavy an object is  
 B. the size of an object  
 C.  $D = \frac{V}{m}$   
 D. how closely packed the matter is
- Q4. The density of glycerin is 1.26 g/mL. If the mass of glycerin increases from 125 g to 250. g, the volume \_\_\_\_\_.  
 A. doubles  
 B. decreases by one half  
 C. is unchanged  
 D. decreases by one fourth
- Q5. The density of glycerin is 1.26 g/mL. If the mass of glycerin increases from 125 g to 250. g, the density \_\_\_\_\_.  
 A. doubles  
 B. decreases by one half  
 C. is unchanged  
 D. decreases by one fourth

*If you make a mistake, and receive "The Goat", you will need to start over. Use the following space to record your data for multiple trials. If you need more space, use the back of your paper for more trials.*

Try #2:

Container 1	Container 2	Container 3	Container 4
Mass: _____	Mass: _____	Mass: _____	Mass: _____
Volume: _____	Volume: _____	Volume: _____	Volume: _____
Density: _____	Density: _____	Density: _____	Density: _____
Order____	Order____	Order____	Order____

Solid Ball: Mass: _____ Volume: _____	Density of the Ball: _____
---	----------------------------

Try #3

Container 1	Container 2	Container 3	Container 4
Mass: _____	Mass: _____	Mass: _____	Mass: _____
Volume: _____	Volume: _____	Volume: _____	Volume: _____
Density: _____	Density: _____	Density: _____	Density: _____
Order____	Order____	Order____	Order____

Solid Ball: Mass: _____ Volume: _____	Density of the Ball: _____
---	----------------------------